



4-H Goat Project

Name: _____

4-H Club _____

Choosing An Animal

1-3. ID the following Breeds of Goats:

1. _



2. _



3. _



4. What is the Latin name for goat? _


5. The _ , a dairy goat breed, is the oldest known registered breed in the world.

6. LaManchas have two types of ears

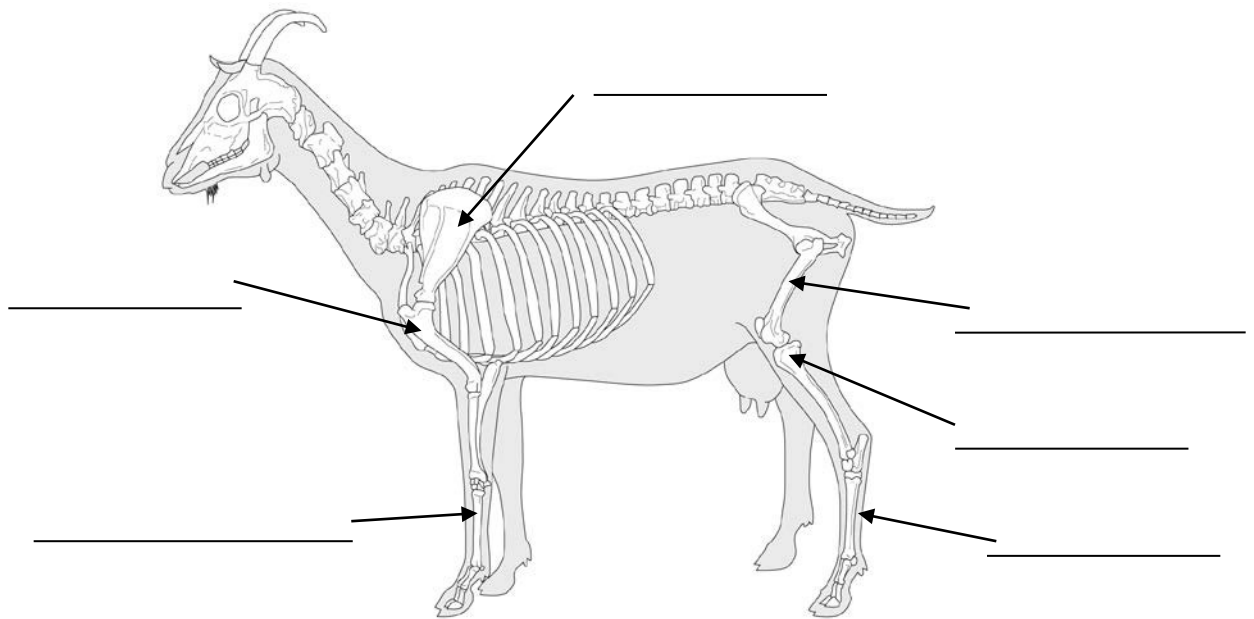
a. _____ ear; very little and no _

b. _____ ear; maximum of _ inches in length.

7-14 Label the Following:

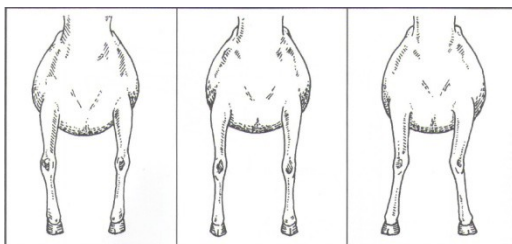


15. Much smaller than the standard dairy goat breeds, known to produce approximately 1 quart of high fat milk per day for up to 10 months. _
16. This goat was selected for specific traits during development including rapid growth rate, increased fertility, good mothering skills and soundness in feet and legs. _
- 17-22. Label the following:



23. Circle which of the below pictures represent the idea leg structure of a goat.

Front Legs



Back Legs

