

4-H Swine

LaGrange County
Record Sheet A
Grade 9

Name: _____ 4-H Club _____

Leader Signature: _____ Date: _____


1. What does the practice of phase feeding involve? _____

2. List three ways to prevent disease from entering your swine herd: _____


3. List three diseases that are detrimental to swine: _____

4. Draw the corresponding ear-notches on the ears of the pigs below.


10-2




27-3



90-15



31-5



5. List four correlating factors that generate a pig's environment: _____

6. The environment needed depends on the pig's... _____

7. List three reasons why you should not tap your pig on the ham during a swine show: _____

8. What two things determine the performance level of a herd? _____

9. List two benefits to crossbreeding animals: _____

10. List five factors that should be considered when selecting a breeding gilt: _____

11. What are four advantages of using artificial insemination? _____

12. List three procedures that are administered during the processing of newborn pigs: _____

13. Why is it important to clip the needle teeth on newborn pigs? _____

14. All IM injections should be given in the _____ using a spot just behind and below the _____. All SQ injections should be deposited under the _____ in the _____.

15. What are the four major areas of animal science careers? _____
