

4-H Swine

LaGrange County
Record Sheet A
Grade 7

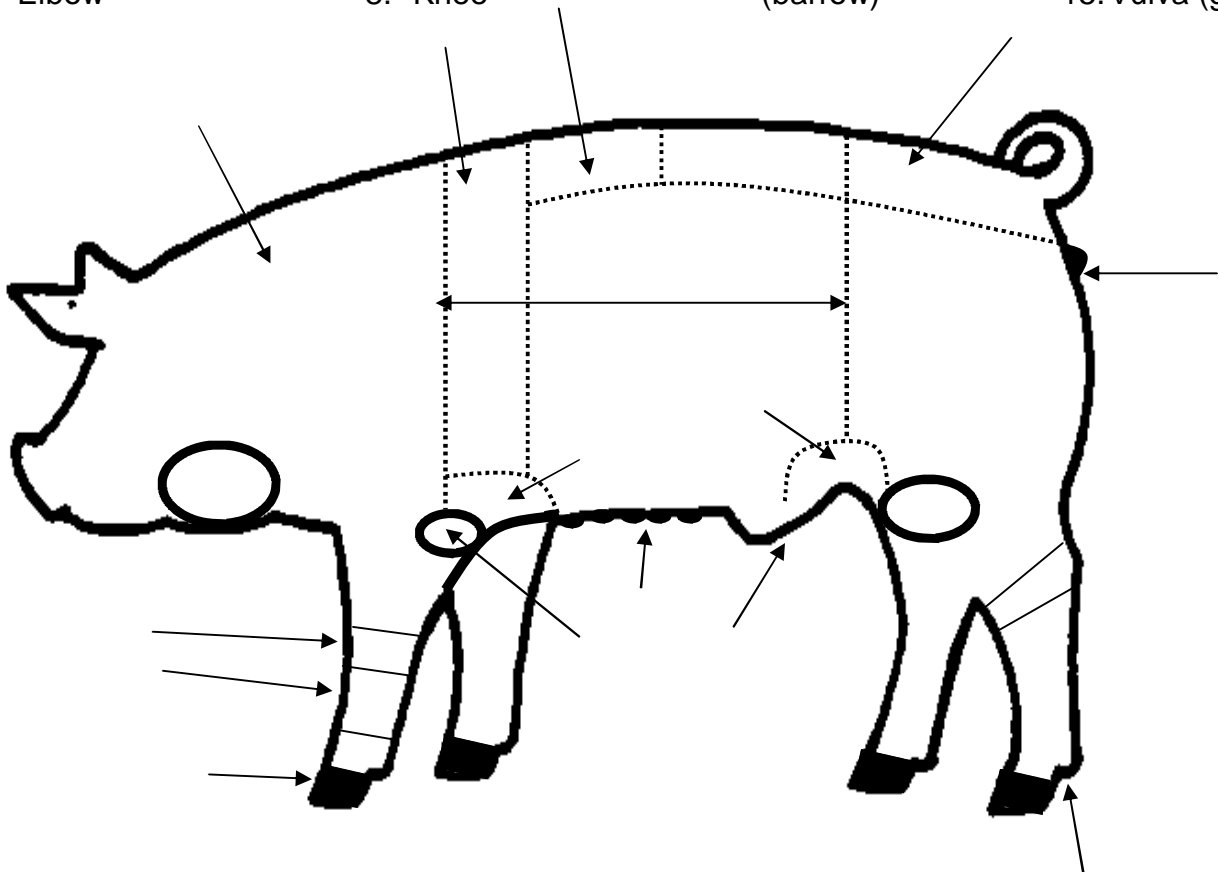
Name: _____ 4-H Club _____

Leader Signature: _____ Date: _____

1. Label the parts of the pig shown below, (write the number of the part on the corresponding arrow):

Words to choose from:

- | | | | |
|----------------|----------------|------------------------|------------------|
| 1. Back | 5. Foot (toes) | 9. Rear Flank | 12. Shoulder |
| 2. Cannon bone | 6. Fore Flank | 10. Rump | 13. Side |
| 3. Dewclaw | 7. Forerib | 11. Sheath
(barrow) | 14. Teats |
| 4. Elbow | 8. Knee | | 15. Vulva (gilt) |



2. What are the four features of the basic body design on a structurally sound hog? _____


3. What breed of swine is the PSS stress gene mainly associated with? _____


4. What carcass measurements are combined to predict the pounds of lean in a pig? _____


5. List five cuts of meat that come from the loin. _____

6. Name three industrial by-products that come from pig hair. _____

7. Write the correct ear notch number on the line below each pig.







8. List three sources for odor in and around swine buildings. _____

9. How can clipping your hogs cause unnecessary stress for the animal? _____

10. When handling swine it is important to remember that pigs are generally _____ -

_____ and have poor _____. This results in extreme sensitivity to _____, which may cause the animal to balk at _____ or rapid changes from _____ to _____.